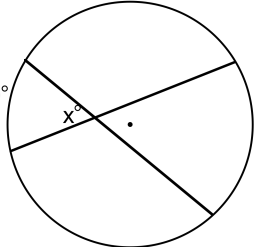
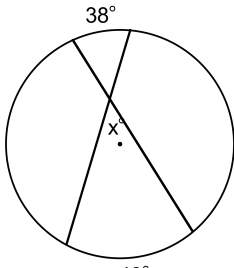
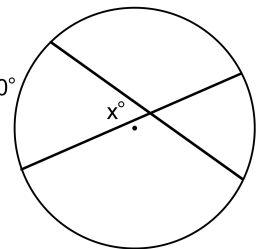
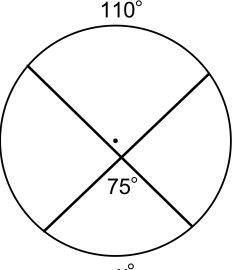
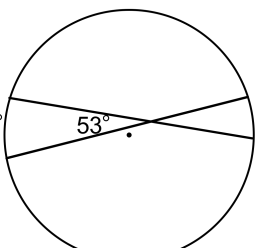
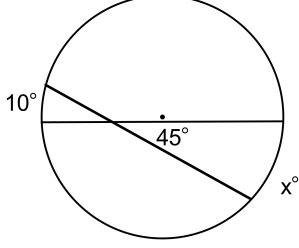
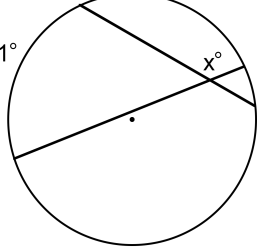
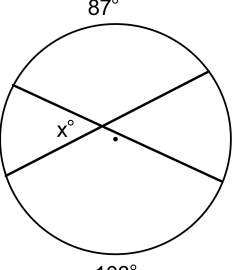


# Intersecting Chords (Angles)

Name: \_\_\_\_\_

Date: \_\_\_\_\_

Find  $x$ .

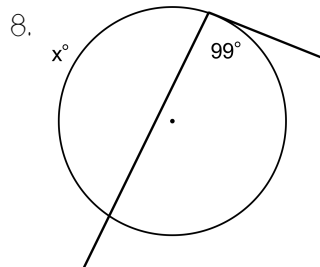
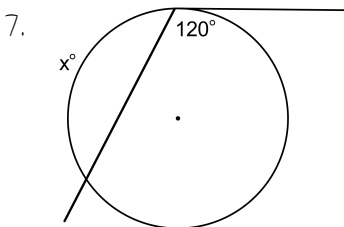
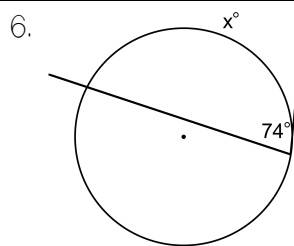
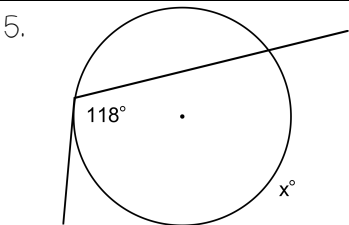
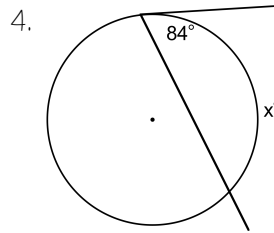
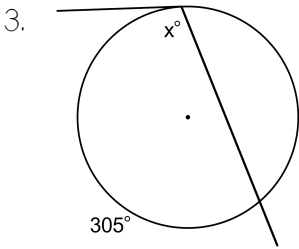
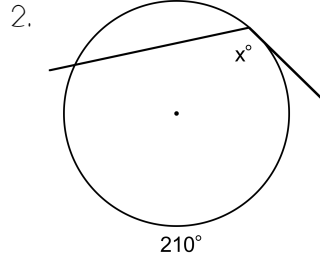
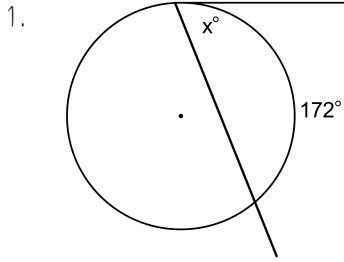
<p>1.</p> 	<p>2.</p> 
<p>3.</p> 	<p>4.</p> 
<p>5.</p> 	<p>6.</p> 
<p>7.</p> 	<p>8.</p> 

# Intersecting Tangent & Secant (Angles)

Name: \_\_\_\_\_

Date: \_\_\_\_\_

Find  $x$ .



- $240^\circ$   
   $168^\circ$   
   $120^\circ$   
   $198^\circ$   
   $152.5^\circ$   
   $148^\circ$   
   $86^\circ$   
   $105^\circ$   
   $162^\circ$   
   $236^\circ$   
   $172^\circ$   
 7